

S.H.I.P.S.

[A Premier Institution]

SHREE HANUMAT INTERNATIONAL PUBLIC SCHOOL

(Senior Secondary)

Affiliated to the C.B.S.E., New Delhi, Vide Code No. – 1630686,
G.T. ROAD, GORAYA (Distt. Jalandhar)- 144409, Contact – 78376-36615, 01826-264069



Home Assignment 2023-24

Name: _____

Grade : V Roll. No. _____

Note:

1. Assignment Marks will be added in the Terminal Assessment.
2. Parents are required to let their child do his/her assignments on his/her own.
3. Use loose sheets if required to perform the task.
4. Best Assignment of the year will be recognised.

ENGLISH

1. Read any one story from the following list and describe it in your in about 100 to 120 words .Also draw and colour your favourite character from the story.

a. Beauty and the Beast

b. Snow White and the Seven Dwarfs

c. The Little Mermaid

d. Alladin

e. Any other story of your choice.

2. Write an email to your friend sharing some exciting moments of your summer vacation and send to a copy to sanyogitagarg915@gmail.com

3. Visit a public place (bus stand/railway station/temple/gurudwara/orphanage/old-age home /historical place etc) and make a video recording of your observations with running commentary and mail the video to sanyogitagarg915@gmail.com

OR

Make a video helping your family members in household chores with running commentary and mail it to sanyogitagarg915@gmail.com

4. Watch any English cartoon movie. After watching it draw and color your favourite character and describe why it is your favourite.

HINDI

1. निम्नलिखित संकेत बिंदु के आधार पर एक -एक कहानी 150 शब्दों में लिखिए

- * मेहनत
- * परीक्षा
- * आम का पेड़

2. निम्न चित्रों का वर्णन अपने शब्दों में करें -



3. मात्रा चार्ट बनाएं।

4. प्रस्तुत पत्र में विराम चिन्हों का गलत प्रयोग करने से पत्र लिखने वाला अबकी बात सही तरीके से नहीं बता पा रहा इसलिए उसकी मदद करते हुए विराम चिन्हों का सहयोग करते हुए पत्र को दोबारा लिखिए -

प्रिय अमित,

प्रणाम। आपके चरणों में क्या चक्कर है? आपने कई दिनों से पत्र नहीं लिखा मेरी सखी रीना को। नौकरी से निकाल दिया है हमारी गाय ने। बछड़ा दिया है दादा जी ने। सिगरेट पीनी शुरू कर दी मैंने। बहुत पत्र डाले तुम नहीं आए कुत्ते के बच्चे। भेड़िया खा गया है चीनी। घर आते वक्त ले आना एक खूबसूरत औरत। मेरी नई सहेली बन गई है माधुरी। इस समय टी०वी० पर गा रही है हमारी भैंस। बेच दी है तुम्हारी दादी। तुम्हें याद करती है तुम्हारी पड़ोसन। मुझे तंग करती है तुम्हारी बहन। सिरदर्द से लेटी है बिल्ली। पागल हो गई है तुम्हारी जमीन। गेहूँ उग आए हैं चाचा जी के सिर पर। सिकरी हो गई है मेरी पाँव में। चोट लग गई है तुम्हारे पत्र को। हर वक्त तरसती रहती है।

तुम्हारी
कामिनी

5. छुट्टियों में आपने अपने परिवार की मदद किन-किन कामों में की, उसका वर्णन 150 शब्दों में करें तथा उस बर्तन में आए संज्ञा, सर्वनाम, क्रिया तथा विशेषण शब्दों को नीचे दिए गए रंगों से रेखांकित करें।

संज्ञा - लाल

सर्वनाम -हरा

क्रिया - नारंगी

विशेषण - पीला

PUNJABI

Activity:-

ਹੇਠਾਂ ਦਿੱਤੇ ਨੁਕਤਿਆਂ ਦੇ ਆਧਾਰ ਤੇ ਕਹਾਣੀ ਰਚਨਾ ਕਰੋ:-

ਇੱਕ ਪੁੱਤਰ..... ਮਾੜੀ ਸੰਗਤਚੰਗੇ ਸੇਬ ਇੱਕ ਖਰਾਬਫਲਾਂ ਦੀ ਟੋਕਰੀ ਕੁਝ

ਦਿਨਾਂ.... ਸਾਰੇ ਸੇਬ ਖਰਾਬ.....ਮਾੜੀ ਸੰਗਤ ਦਾ ਅਸਰਸਿੱਖਿਆ।

(on scrap book)

Do worksheets of ch 2,3,4

given at the end of your reader book.(on revision note book)

ਹੇਠਾਂ ਦਿੱਤੇ ਵਿਸ਼ਿਆਂ ਉੱਤੇ ਪੈਰਾ ਰਚਨਾ ਕਰੋ:-

ਸਾਡਾ ਪੰਜਾਬ, ਪਾਰਕ ਦੀ ਸੈਰ(roll no.1-14)

ਸਵੇਰ ਦੀ ਸੈਰ ,ਪਰਿਵਾਰ ਦਾ ਮਹੱਤਵ(roll no.15-28)

ਪਾਣੀ ਦੀ ਬੱਚਤ ,ਤਿਉਹਾਰਾਂ ਦਾ ਮਹੱਤਵ

(Roll no 29-42)

MATHS

CHAPTER-1 (NUMBERS System)

Fill in the blanks.

- 1.The face value of 5 in 53629 is -----.
- 2.1 thousand=----- hundreds.
- 3.The successor of largest 4 digit number is -----.
- 4.The largest 6 digit number is -----.
- 5.The smallest 5-digit numeral is -----.
- 6.The numeral just before 90,000 is -----.
- 7.The places, thousands and ten thousands, belong to the ----- period.
- 8.----- hundred= 10 tens.

Choose the correct option.

9. The sum of the place value and face value of 3 in 6,53,268 is---
(A) 3003. (B) 3030. (C) 3000. (D) 6
10. The period of 8 in the number 66,983 is :
(A) ones. (B) thousands. (C) lakhs. (D) crores
11. $8 \times 1,00,000 + 5 \times 10,000 + 6 \times 1,000 + 9 \times 100 + 0 + 5$ is equal to—
(A) 856095. (B) 856905. (C) 850695. (D) 865905
- 12.The period of the digit ----- in 6,54,321 is Lakhs.
(A) 5. (B) 3. (C) 4. (D) 6

Answer the following questions.

13. Write down the periods and corresponding places of an 8-digit number with an example.
14. Write the number names and use commas between the periods.
(A) 7183010.
(B) 2200050.
15. Write down the periods of greatest numerals of 9 -digits.
16. Write down the numeral which is one more than the greatest 5-digit numeral.
17. Which numeral has more digits---- greatest 5digit numeral or smallest 6 digit numeral?

Long answer type question.


18. Find the sum and difference of the place values of two sevens in 3,98,73,270.
19. Write the three periods of 6 digit numeral .Also mention the corresponding places of each period.

Roman Numerals Worksheet

	1	2	3	4	5	6	7	8	9	10
1s	I	II	III	IV	V	VI	VII	VIII	IX	X
10s	X	XX	XXX	XL	L	LX	LXX	LXXX	XC	C
100s	C	CC	CCC	CD	D	DC	DCC	DCCC	CM	M

Match the Roman numerals to the correct numbers.

150
200
790
786
555
232
432
999
70
40



XL
LXX
CMXCIX
CDXXXII.
CCXXXII
XL
CC
DCCXC
DLVI
DCCLXXXV

Chapter 2 Four Operations

1. Find the sum of:

(i) $7853 + 6329$

(ii) $342815 + 506793$

2. Add the following:

(i) $21437 + 52892 + 3204$

(ii) $2756 + 52134 + 37292$

3. Subtract:

(i) $54201 - 22873$

(ii) $86275 - 35679$

4. Simplify:

(i) $4391 + 7530 - 9418$

(ii) $8457 + 3502 - 6989$

5. There are 2,983 boys and 2,175 girls in a school. Find the total enrolment of the school. Find also the number of more boys than girls on the rolls of the school.

6. What should be added to 79,415 to make it the greatest five-digit number?

7. By how much is 89283 is greater than 79382?

8. What should be subtracted from 98989 to get 88888?

9. Find the number which is:

(i) 1289 more than 7701

(ii) 10137 less than 36503

10. Estimate each sum to the nearest hundred:

(i) $321345 + 671209$

(ii) $74279 + 28725$

Chapter 3

Factors and Multiples

1. Prime factorization of 50 is

i) 5×10

ii) $2 \times 10 \times 5$

iii) 25×2

iv) $2 \times 5 \times 5$

2. Which list is made up multiples of 4.

i) 1, 4, 6, 20

ii) 4, 8, 20, 100

iii) 23, 40, 22, 50

iv) 100, 78, 55, 70

Fill in the blanks:

3. Smallest odd composite number is _____.

4. 80 has _____ factors.

Answer the followings:

5. Write the HCF of 20, 25 and 60.

6. Write all the prime numbers in between 80 and 100.

Short answer type question-I:

7. Do the prime factorization of 72 by division method.

8. Write all the multiples of 25 which is less than 200.

Short answer type question-II

9. Find the LCM of 60, 80 and 120 by prime factorization method.

10. Write all the prime numbers lies in between 20 and 40. Also find their sum.

Long answer type question:

11. Rahul has 18 oranges, 27 pears and 12 bananas. He wants to make fruit basket with an equal amount of each fruit in each basket. What is the largest number of fruit basket he can make?

EVS

Tick the correct answer:-

1. The children of my uncle are my
a) Friends b) brothers c) cousins
2. The rainwater that goes into soil is
a) Underground water b) surface water c) drinking water
3. Irrigation means to provide
a) Oxygen to crops b) water to crop c) water for drinking
4. It is not an aquatic plant/animals.
a) Monkeys b) fish c) prawn
5. This helps frogs and toads to swim in water?
a) Lungs b) moist skin c) webbed feet

Give answer in one word:-

6. Name this plant :



7. What is the name of this source of water.



8. Name this insect.



Learning by doing:-

9. Meghan's mother always tells her not to eat junk food, so does your mother. Let us join a healthy club to be healthy.
 - I. Make your own diet chart for a week on an A-3 size sheet.
 - II. Learn to prepare 2-3 recipes
10. Create a planter: - Using an old can or plastic bottles and decorate with any recycled materials. Grow a plant in a pot and click a picture with it. Also feed the birds and keep a water pot for them.
11. Classify the following things into floating substance and sinking substance
Plastic balls, egg, oil, stone, wood, iron nail, pebbles, sand, copper
12. I speak without a mouth, yet you hear me, who am I?
13. I look at you, you look at me. I raise my right, you raise your left, who am I?
14. I am not alive, but have five fingers, who am I?

Case Study


15. Even today people get water from very old lakes, dharas, stepwells and naulas. Many customs and festivals are related to water. At some places, whenever lakes get filled up with rainwater, the people gather around the lake to celebrate. In Uttarakhand after getting married she has come to new village. She bows to the spring or the pond.


- a) In which state there is custom of water?
- b) From where we get water?
- c) Write some other customs related to water.


16. Poem:


Read this poem to know which plant came from where.


Did you know this?


 From South America long ago, came a tomato, a potato, and a green chilli.


 Do you know this? A cabbage came from Europe, and also a pea.

 From Africa came a coffee bean, and a green *bhindi*.


 They crossed the land. They crossed the sea.

 Did you know this?
(*Bhindi* is also called okra, and *methi* is called fenugreek)

 A mango sang, 'Come in! Come in!' An orange smiled inside its skin. 'Welcome to India,' a banana said. the *methi* and spinach, brinjal and radish, nodded its head.

 Did you know this?
...

— Rajesh Utsah
Chakmak, May-June 2002
(Translated by Anupa Lal)



17 Read the report from a newspaper and discuss it.



Read the report from a newspaper and discuss it.

Tuesday, 18 December 2007, Andhra Pradesh

Farmers in Andhra Pradesh have been sent to jail for not being able to pay back their loans. They had suffered a big loss in farming. One of these farmers, Nallappa Reddy, had taken a bank loan of Rs. 24,000. To repay the loan, he had to take another loan from a private moneylender, at a very high rate of interest. Even after repaying Rs. 34,000 Reddy could not repay the entire loan. Reddy says, "The bank sends farmers to jail for not paying back small loans. But what about the

big businessmen? They take loans of crores of rupees. Nothing happens to them when they do not return the money!"

Nallappa Reddy's story is shared by thousands of farmers in India who are suffering huge losses. The situation is so bad that many farmers see no way out of this except to commit suicide. According to government figures 1,50,000 farmers have died like this between 1997 and 2005. This number may be much higher...

- i. What question come to your mind about farmers and farming ?
- ii. How many farmers dead between 1997 and 2005 ?
- iii. From where Nallappa take loan ?

18. Activity /Project

Activities/projects

1 Attach any five spices also write it's name. (Roll no - 1,6,11,16,21,26,31,36,41)

2 write story about kindness towards animals in your own words.
(Roll no -2,7,12,17,22,27,32,37,42)

3 Make poster on "Reduce garbage - save environment". (Roll no-3,8,13,18,23,28,33,38)

4 Make a hut with an old box and other waste materials. (Roll no-4,9,14,19,24,29,34,39)

5 while performing different postures of yoga (any 5), click picture of yourself also write five lines about that yoga postures (Roll no -5,10,15,20,25,30,35,40)

Models:-

1 Working model on rain water harvesting (Roll no - 1,6,11,16,21,26,31,36,41)

2 working Traffic light (Roll no -2,7,12,17,22,27,32,37,42)

3 working model on Water purification plant. (Roll no-3,8,13,18,23,28,33,38)

4. Homemade vacuum cleaner. (Roll no-4,9,14,19,24,29,34,39)

5 Make best out of Waste. (Roll no -5,10,15,20,25,30,35,40)