

S.H.I.P.S.
[A Premier Institution]

SHREE HANUMAT INTERNATIONAL PUBLIC SCHOOL
(Senior Secondary)

Affiliated to the C.B.S.E., New Delhi, Vide Code No. – 1630686,
G.T. ROAD, GORAYA (Distt. Jalandhar)- 144409, Contact – 78376-36615, 01826-264069



Home Assignment

2023-24

Name: _____

Grade : III Roll. No. _____

Note:

1. Assignment Marks will be added in the Terminal Assessment.
2. Parents are required to let their child do his/her assignments on his/her own.
3. Use loose sheets if required to perform the task.
4. Best Assignment of the year will be recognised.

ENGLISH

Speaking

1. Prepare a vlog- Make a bird's feeder with waste material and place outside your house.

Links

<https://youtu.be/wduCroN-kS8>

<https://youtu.be/lnWKBwO7xDA>

<https://youtu.be/3ex0EmCWyNQ>

Writing

2. Visit a place (like railway station/ airport/ hospital / temple/ hill station) and write 100-120 words describing your experience.

Listening

3. watch any English cartoon movie of your choice and write the story in your own words

Reading

4. Read any story book from the link provided and write 10 lines about your favourite story.

Links:-

<https://monkeypen.com/pages/free-childrens-books>

<https://www.pdfbooksworld.com/books>

5. Read the story from Marigold book- Nina and the Baby Sparrow and answer the following questions-

Q1- Why was the great joy in Nina house?

Q2- Where was Nina's family going for the wedding?

Q3- Why was Nina's Mother upset?

Q4- Where did Nina's mother take her?

Q5- Who all were going to Delhi?

1. निम्नलिखित गद्यांश को पढ़कर प्रश्नों के उत्तर दीजिए

एक व्यापारी के पास एक गधा था। वह गधा बहुत चालाक और आलसी था। एक दिन उसके मालिक ने बाज़ार जाकर कुछ नमक बेचने की सोची। वह अपने गधे की पीठ पर नमक का एक बोरा रखकर बाज़ार की ओर चल पड़ा। जैसे ही वे दोनों रास्ते में नदी को पार करने लगे कि अचानक गधे का पैर फिसल गया और वे नदी में गिर पड़ा। गधे को चोट तो नहीं लगी पर खड़े होने पर उसे ऐसे लगा कि उसकी पीठ पर रखे नमक के बोरे का बोझ कम हो गया है।

क. गधा किसके पास था?

ख. मालिक ने एक दिन क्या बेचने का सोचा?

ग. गधा कैसा था?

घ. गधा कहाँ गिर गया?

इ.वाक्य बनाओ :

आलसी-

बाज़ार -

2. निम्नलिखित अपठित गद्यांश के आधार पर प्रश्नों के उत्तर दीजिए

सोनपुर गाँव के पास गोकुल का एक बहुत बड़ा बगीचा था। उसमें उसने आम, अमरूद, आलू और जामुन के पेड़ लगाए थे। गोकुल बहुत मेहनत से पौधों की देखभाल करता था। पास के गाँव के बच्चे प्रतिदिन गोकुल के पास आकर उसकी मदद करते थे। गोकुल बच्चों से बहुत प्यार करता था। वह उन्हें खाने के लिए खूब फल देता। बच्चे भी उसे काका कहकर बुलाते थे।

क. गोकुल का बगीचा कौन से गाँव में था?

ख. गोकुल के बगीचे में कौन-कौन से पेड़ थे

ग. बच्चे गोकुल को क्या कहकर बुलाते थे

घ. गोकुल पौधों की देखभाल कैसे करता था

इ. 1. विलोम शब्द लिखिए:

छोटा, दूर

2. वचन बदलो

बगीचा, पौधा

3. चित्र को ध्यान में देखते हुए इसका वर्णन

5-7 पंक्तियों में करो।



4.



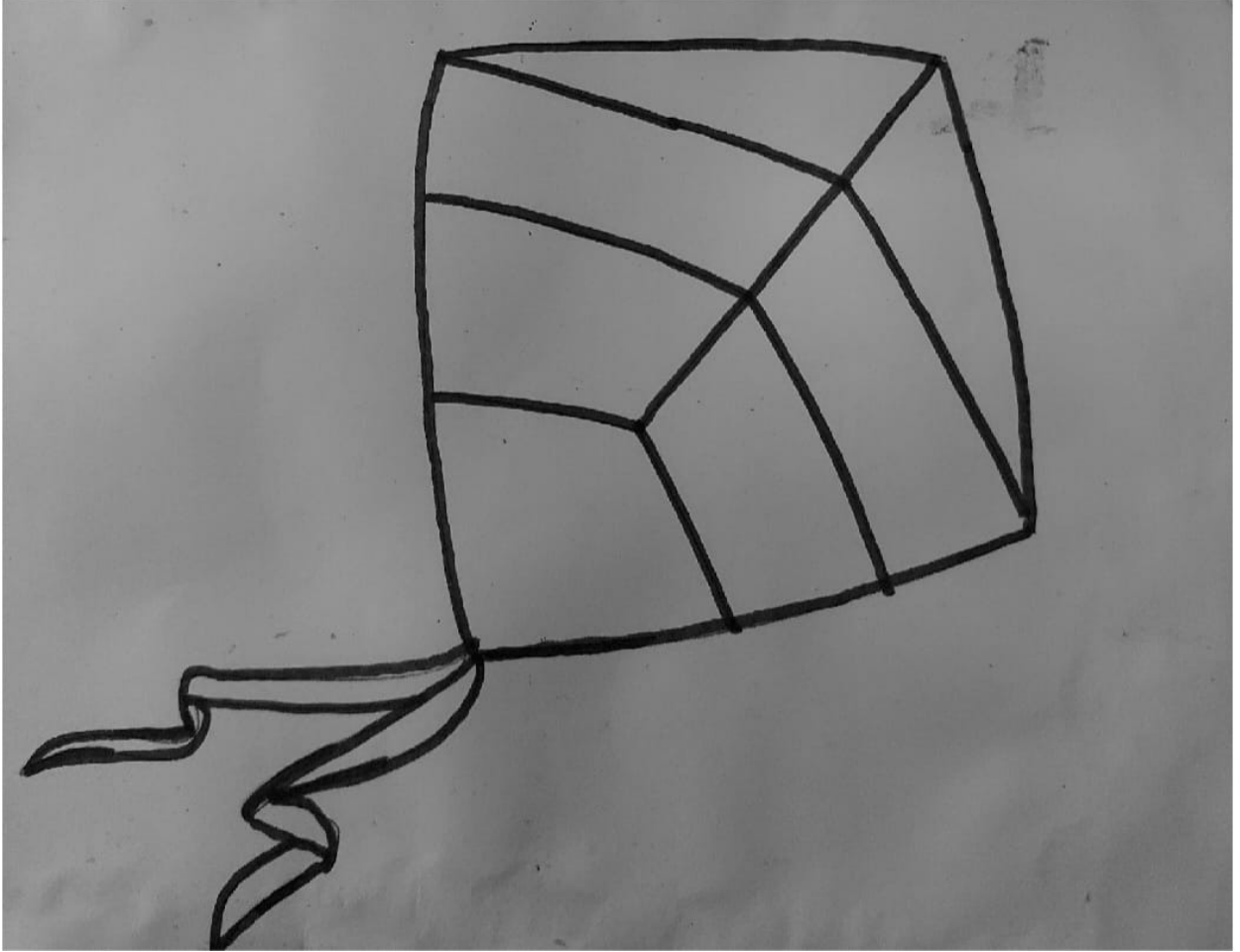
5. एक चार्ट के आधे हिस्से पर मात्रा चार्ट बनाइए और रंगों से सजाइए।

6. एक फैमिली ट्री बनाकर अपने परिवार से सदस्यों का चित्र चिपकाकर बताइए कि आपके घर के सदस्य क्या क्या काम करते हैं?

7. बच्चों, यह है मोगली और उसके साथी। इनमें से जो पुलिंग है उनको पीले रंग से और जो स्त्रीलिंग है उन्हें गुलाबी रंग से रंग दीजिए।



8. यह है आपकी पतंग। इसे इंद्रधनुष के सात रंगों से सजाइए-



1. ਆਪਣੀ ਪੰਜਾਬੀ ਪਾਠ - ਪੁਸਤਕ ਦੇ ਅੰਤਲੇ ਪੇਜ ਨੰਬਰ 6 ਦੀ ਵਰਕਸ਼ੀਟ ਨੂੰ ਕਰੋ।

ਪਾਠ-4

ਕਿੱਕਲੀ ਕਲੀਰ ਦੀ

I. ਕਵਿਤਾ ਦੇ ਅਧਾਰ 'ਤੇ ਹੇਠ ਲਿਖੇ ਪ੍ਰਸ਼ਨਾਂ ਦੇ ਉੱਤਰ ਮੌਖਿਕ ਰੂਪ ਵਿੱਚ ਦਿਓ —

1. ਕਵਿਤਾ ਵਿੱਚ ਕਿਸ ਦੇ ਪਿਆਰ ਨੂੰ ਦਰਸਾਇਆ ਗਿਆ ਹੈ ?
2. ਭੈਣ ਅਨੁਸਾਰ ਉਸਦਾ ਵੀਰਾ ਦੇਖਣ ਵਿੱਚ ਕਿਸ ਤਰ੍ਹਾਂ ਦਾ ਹੈ ?
3. ਪੀਜ਼ਾ ਨੂਡਲ ਕੌਣ ਖਾਂਦਾ ਹੈ ?
4. ਕੀ ਭੈਣਾਂ ਦੇ ਮਨ ਵਿੱਚ ਭਰਾਵਾਂ ਲਈ ਪਿਆਰ ਹੁੰਦਾ ਹੈ ?
5. ਤੁਸੀਂ ਆਪਣੇ ਭੈਣ/ਭਰਾ ਨੂੰ ਕਿੰਨਾ ਪਿਆਰ ਕਰਦੇ ਹੋ ?

II. ਹੇਠ ਲਿਖੇ ਸ਼ਬਦਾਂ ਦੇ ਸਮਾਨ ਲੈਆਤਮਕ ਸ਼ਬਦ ਲਿਖੋ —

ਸ਼ਬਦ	—	ਲੈਆਤਮਕ ਸ਼ਬਦ	ਸ਼ਬਦ	—	ਲੈਆਤਮਕ ਸ਼ਬਦ
1. ਵੀਰ	—	_____	2. ਛੋਟਾ	—	_____
3. ਖਾਂਦਾ	—	_____	4. ਮੇਰਾ	—	_____

III. ਹੇਠ ਲਿਖੇ ਸ਼ਬਦਾਂ ਦੇ ਵਿਰੋਧੀ ਸ਼ਬਦ ਲਿਖੋ —

ਸ਼ਬਦ	—	ਵਿਰੋਧੀ ਸ਼ਬਦ	ਸ਼ਬਦ	—	ਵਿਰੋਧੀ ਸ਼ਬਦ
1. ਮੇਰਾ	—	_____	2. ਛੋਟਾ	—	_____
3. ਥੋੜ੍ਹਾ	—	_____	4. ਮੋਟਾ	—	_____

IV. ਆਪਣੇ ਭੈਣ/ਭਰਾ ਦੇ ਬਾਰੇ ਵਿੱਚ ਪੰਜ ਵਾਕ ਲਿਖੋ —

2ਇੱਕ ਚਾਰਟ ਪੇਪਰ ਤੇ ਆਪਣੇ ਮਨਪਸੰਦ ਸਬਜ਼ੀਆਂ ਦੇ ਚਿੱਤਰ ਬਣਾਓ ਅਤੇ ਉਨ੍ਹਾਂ ਦੇ ਨਾਂ ਲਿਖੋ।

3ਵਰਕਸ਼ੀਟ ਨੂੰ ਪੂਰਾ ਕਰੋ।

4ਹੇਠ ਲਿਖੀ ਵਰਕਸ਼ੀਟ ਨੂੰ ਕਰੋ।

1. ਚਿੱਤਰ ਦੇਖ ਅਤੇ ਹੇਠ ਦਿੱਤੇ ਅੱਖਰਾਂ ਦੀ ਤਰਤੀਬ ਬਦਲ ਕੇ ਉਹਨਾਂ ਦੇ ਜੋੜ ਤੋਂ ਸ਼ਬਦ ਬਣਾਓ :

(ੳ) ਲ, ਬ, ਬ ਬ + ਲ + ਬ = ਬਲਬ

(ਅ) ਤ, ਤ, ਖ

(ੲ) ਲ, ਸ, ਫ

(ਸ) ਲ, ਟ, ਸ

(ਹ) ਸ਼, ਲ, ਮ, ਗ

2. ਦੋ, ਤਿੰਨ ਜਾਂ ਚਾਰ ਅੱਖਰਾਂ ਦੇ ਜੋੜ ਤੋਂ ਬਣੇ ਚਾਰ ਸ਼ਬਦ ਲਿਖੋ ਜਿਨ੍ਹਾਂ ਦੇ ਅਰੰਭ ਵਿੱਚ ਹੇਠ ਦਿੱਤੇ ਅੱਖਰ ਆਉਣ :
 ਅ ਅਦਰਕ ਕ
 ਹ ਤ

3. ਚਿੱਤਰ ਦੇਖ ਕੇ ਖਾਲੀ ਥਾਂਵਾਂ ਨੂੰ ਅੱਖਰਾਂ ਨਾਲ ਭਰੋ ਅਤੇ ਬੈਕਟਾਂ ਵਿੱਚ ਚਿੱਤਰਾਂ ਦੇ ਨਾਂ ਲਿਖੋ :

ਦ + + ਮ + ਪ + ਰ + + ਫ਼ + + ਲ

(.....) (.....) (.....)

ਬਿਹਾਰੀ ਸ਼ਬਦ

Bihari Words

Put the letters for each word in the correct order.



□	□	□
ਹ	ੀ	ਦ




□	□	□
ਤ	ਰ	ੀ



□	□	□
ੀ	ਲ	ਤ



□	□	□	□
ਟ	ਸ	ੀ	ੀ




□	□	□	□
ੜ	ਕ	ੀ	ੀ

ਸਿਹਾਰੀ (ੴ) ਸ਼ਬਦ


PUT THE LETTERS FOR EACH WORD IN THE CORRECT ORDER.



ਪ ਤ ਿ ਾ



ਿ ਰ ਹ ਨ



ਰ ਚ ਿ ਮ



ਿ ਿ ਬ ਲ



ਰ ਿ ਨ ਬ



ਕ ਟ ਟ ਿ


ਚਿੱਤਰ ਦੇਖ ਕੇ ਸਹੀ ਸ਼ਬਦ ਨਾਲ ਮਿਲਾਨ ਕਰੋ



ਰਿੱਛ



ਸੱਪ



ਕੱਛੂਕੁੰਮਾ



ਹਾਥੀ



ਜੈਬਰਾ



ਜਿਰਾਫ



ਬਾਘ



ਬੱਬਰ ਸ਼ੇਰ

Addition

Practice 1 Addition without Regrouping

1. Consider each square (□) as per its place value and find the sum.

a) $2452 + 5$

Th	H	T	O
□□	□□□□	□□□□□	□□
			□□□□□

Th	H	T	O
2	4	5	2
			5

b) $4368 + 3321$

Th	H	T	O
□□□□	□□□	□□□	□□□□
		□□□	□□□□
□□□	□□□	□□	□

Th	H	T	O
4	3	6	8
3	3	2	1

2. Add the following.

a)

Th	H	T	O
5	3	7	2
			6

b)

Th	H	T	O
7	9	3	4
		4	2

c)

Th	H	T	O
8	3	7	8
	5	0	0

d) $8328 + 1031 =$ _____

e) $6424 + 3243 =$ _____

3. Consider each square (\square) as per its place value and find the sum.

a) $1101 + 3224 + 4213$

Th	H	T	O
\square	\square		\square
$\square\square\square$	$\square\square$	$\square\square$	$\square\square\square\square$
$\square\square\square\square$	$\square\square$	\square	$\square\square\square$

Th	H	T	O
1	1	0	1
3	2	2	4
4	2	1	3

b) $2302 + 1103 + 3234$

Th	H	T	O
$\square\square$	$\square\square\square$		$\square\square$
\square	\square		$\square\square\square$
$\square\square\square$	$\square\square$	$\square\square\square$	$\square\square\square\square$

Th	H	T	O
2	3	0	2
1	1	0	3
3	2	3	4

4. Add the following.

a)

Th	H	T	O
2	1	3	4
3	0	0	2
1	3	4	0

b)

Th	H	T	O
4	3	2	0
4	2	4	5
1	1	3	2

c)

Th	H	T	O
4	2	0	2
	3	0	0
		1	0

d) $48 + 320 + 4211 =$ _____

e) $3102 + 344 + 5401 =$ _____

Practice 2 Addition with Regrouping

1. Add the following.

a)

Th	H	T	O
5	4	2	3
+	2	4	4

b)

Th	H	T	O
2	7	4	3
+	1	5	8

c)

Th	H	T	O
2	4	3	8
+	3	5	6

d)

Th	H	T	O
5	4	2	9
+	1	2	3
	2	5	6
			4

e)

Th	H	T	O
7	2	4	7
+	1	0	3
	1	3	4
			5

f)

Th	H	T	O
2	4	3	3
+	4	4	4
	1	0	1
			7

g)

Th	H	T	O
4	3	4	7
+	1	4	3
	3	7	8
			9

h)

Th	H	T	O
6	8	6	4
+		4	2
	2	1	0
			3

i)

Th	H	T	O
2	3	2	1
+	1	3	8
	2	6	4
			2

j)

Th	H	T	O
1	3	2	5
+	1	3	4
	1	1	2
			5

k)

Th	H	T	O
3	5	4	4
+	2	1	3
	1	5	2
			4

l)

Th	H	T	O
4	4	4	4
+	2	2	7
	1	1	1
			1

Word Sum

In number 3428, what is the sum of place values of 3 and 8?

2. Add the following.

a)

$$\begin{array}{r} 4538 \\ + \quad 4 \\ \hline \\ \hline \end{array}$$

b)

$$\begin{array}{r} 6384 \\ + \quad 47 \\ \hline \\ \hline \end{array}$$

c)

$$\begin{array}{r} 3482 \\ 1217 \\ + 2135 \\ \hline \\ \hline \end{array}$$

d)

$$\begin{array}{r} 1354 \\ 2423 \\ + 535 \\ \hline \\ \hline \end{array}$$

e)

$$\begin{array}{r} 2468 \\ 1213 \\ + 1342 \\ \hline \\ \hline \end{array}$$

f)

$$\begin{array}{r} 3623 \\ 1253 \\ + 3154 \\ \hline \\ \hline \end{array}$$

Colour the boxes which contain the above answers. Which letter do you get after colouring the boxes? _____

5023	6930	3645
4312	7343	4684
6834	8249	6324
4542	6431	8030

Wow Sum

In the year 2005, 2010 cars of a company were sold. Every 2 years the sales increased by 200. What was the sale in 2012?

Addition

Subtraction

Practice 1 Subtraction without Regrouping

1. The square boxes (□) inside the place value table form the bigger number. Cross out the boxes from it that form the smaller number and find the difference.

a) $6434 - 3 =$ _____

Th	H	T	O
6434 □□□ □□	□□□□	□□□	□ □ □

$$\begin{array}{r} 6434 \\ - \quad 3 \\ \hline \end{array}$$

b) $7548 - 25 =$ _____

Th	H	T	O
7548 □□□□ □□	□□□□□	□□□□	□□□□ □□□□

$$\begin{array}{r} 7548 \\ - \quad 25 \\ \hline \end{array}$$

c) $9898 - 434 =$ _____

Th	H	T	O
9898 □□□□ □□□□ □	□□□□ □□□□	□□□□ □□□□ □	□□□□ □□□□

$$\begin{array}{r} 9898 \\ - 434 \\ \hline \end{array}$$

d) $5457 - 1234 =$ _____

Th	H	T	O
5457 □□□□□	□□□□	□□□□□	□□□□ □□□

$$\begin{array}{r} 5457 \\ - 1234 \\ \hline \end{array}$$

Subtraction

2. Find the difference.

a)

Th	H	T	O
5	4	9	2
-		8	1

b)

Th	H	T	O
8	6	9	7
-		4	3

c)

Th	H	T	O
9	6	4	7
-	3	3	4

d)

Th	H	T	O
8	9	4	9
-	3	4	4

e)

Th	H	T	O
7	8	3	6
-	2	4	2

f)

Th	H	T	O
6	5	4	9
-	3	2	1

g)

Th	H	T	O
5	5	3	0
-	4	4	2

h)

Th	H	T	O
4	3	9	4
-	1	2	8

i)

Th	H	T	O
3	8	7	4
-	1	8	7

3. Subtract the smaller number from the greater number.

a) $6747 - 2345$

b) $8763 - 4532$

Wow som

Find the difference, if 3 more than greatest 3 digit number is subtracted from 15 more than the smallest 4-digit number.

Subtraction

EVS

Question 1) People who live together in the same house make up a –

- (a) Society (b) family (c) neighbourhood (d) parents

Question 2) The mother's parents are called –

- (a) Maternal grandparents (b) Paternal grandparents

- (c) Cousins (d) single parent

Question 3) Which of the following is not an aquatic animal?

- A. Frogs
- B. Dolphin
- C. Whales
- D. Camels

Question 4) The image shown below belongs to



- A. Wild animals
- B. Aquatic animals
- C. Domestic animals
- D. Amphibian

Question 5) Animal that lives inside the house

- A. Lizard
- B. Cow
- C. Sheep
- D. none

Question 6) The first school of a child _____.

Question 7) Family of only parents and their children _____.

Question 8) Family of grandparents, parents and their children _____.

Question 9) Classify the following games into outdoor and indoor games:


Carrom, Hop-Scotch, Ludo, Pithoo, Gilli danda, Langri taang, Chess, Snake-ladder, Kabaddi, Cards, House-House

Indoor	Outdoor

Question 10) We keep some pet animals at home. We look after them too. In the below are the names of such animals. Complete the table.

Name of the animal	Why do we help them
1) Dog	1) _____
2) _____	2) It gives milk.
3) _____	3) It pulls the cart.
4) Ox	4) _____
5) Hen	5) _____
6) Fish	6) _____
7) _____	7) We love it.
8) Honeybee	8) _____

Question 11) Identify the following images-



Question 12) Read the paragraph and answer the following questions-

Many people plant trees as a memory on the birth of their babies. Talk to your grandparents and find out if they had planted trees around their house when your parents were born. If yes, then collect the following information about them:

- 1) Which tree did they plant?
- 2) How old is that tree now?
- 3) Does it bear fruits or flowers?
- 4) Did your parents ever climb and swing on its branches?
- 5) What changes have they observed in the same tree In the last five years?

Question 13) Read the paragraph and answer the following questions-

Organize a visit to a nearby zoo. Note down your observations in a small notebook.

Answer the following questions-

- 1) Did you see some animals with tail and some without tail. Name them.
- 2) Write the names of four aquatic animals that you saw.
- 3) Did you see a peacock? How was it different from a monkey?
- 4) Did you see an elephant? What was it eating?


Question 14) Read the paragraph and answer the following questions-

Kanika's uncle lives in Mumbai. Earlier her uncle and aunt did not have any child. They love children. Kanika's father advised them to adopt a child. They went to an orphanage. They adopted a girl child. They named her Monika. They have become her foster parents. Foster parents are those parents who adopt a child. Now she is 9years old. She is studying in class 4th in a reputed Public school. She is the centre of joy and happiness of her family.

- 1) Where does Kanika's uncle live?
- 2) Do Kanika's uncle and aunt have any child?
- 3) Who adopted a girl child?
- 4) Define foster parents.

Question 15) Write the recipe of your favourite food. Take the help of your mother. Click photographs and paste it in scrap book.

Question 16) Complete the Crossword with the help of clues given below:




ACROSS

- 1** The animals that live in jungle and forest
- 4** Animals that are very few in numbers and may soon no longer exist
- 9** The animals that are kept in farms or homes
- 10** I am the king of jungle. I live in a den
- 12** The animal that swallow their food
- 13** The tallest animal

DOWN

- 2** I guard your house. I live in a kennel
- 3** The biggest animal
- 5** I live in a hutch
- 6** Silk threads
- 7** A flightless bird which lived for many years and is now extinct
- 8** Candle
- 11** I chase mice away
- 12** The animals that live with us in our house

Question 17) Complete the Crossword with the help of clues given below:



Across

- 3. Name for a brothers, Sisters etc
- 6. Son in law
- 11. Granddaughter 4
- 13. Granddaughter 2
- 14. Every day
- 15. Granddaughter 5
- 17. Mum

18. Daughter

- 19. Everyday
- 20. What is beginning with L

Down

- 1. Dad
- 2. 2nd Son
- 4. Grandson 1
- 5. Son

7. Granddaughter 3

- 8. Grandson 2
- 9. Daughter in law
- 10. Granddaughter 1
- 12. What we do
- 16. We ---our family

Question 18) Fun with words: Find the names of family members from the following table:

G	K	Y	M	O	T	H	E	R	G
R	M	H	U	I	P	Q	W	E	R
A	F	A	T	H	E	R	P	B	A
N	P	P	D	X	C	F	H	J	N
D	T	B	R	O	T	H	E	R	D
F	R	F	A	M	I	L	S	H	M
A	N	D	O	G	N	L	I	V	O
T	D	O	L	G	X	G	S	W	T
H	C	A	C	E	M	A	T	Z	H
E	W	R	A	F	F	H	E	X	E
R	T	E	T	L	O	P	R	C	R

Question 19) Activity: Make a card from pencil shavings. Write a loving message on it and give it to an old person in your home.

Question 20) Project: Make an album on how you spent your summer break. Also write a paragraph on it.