

**S.H.I.P.S.**  
[A Premier Institution]

**SHREE HANUMAT INTERNATIONAL PUBLIC SCHOOL**

**[Senior Secondary]**

**Affiliated to the C.B.S.E., New Delhi, Vide Code No. – 1630686,**

**G.T. ROAD, GORAYA (Distt. Jalandhar)- 144409, Contact – 78376-36615, 99887-03474**



# **Exploring, Learning & Growing- Home Assignment-2025-26**

**(A Thoughtful Mix of Study, Play & Values)**

**Name : \_\_\_\_\_**

**Roll No. \_\_\_\_\_**

**Grade – III**

## **Note to Parents and Guardians**

1. Marks for these assignments will be included in the Terminal Assessment.
2. Kindly encourage your child to complete the work independently. Gentle support is welcome, but let the learning be child-led.
3. You may use loose sheets for tasks requiring extra space or creativity.
4. The Best Assignment of the Year will be awarded and recognized during school events.

## **Guidelines for a Balanced and Enriching Learning Experience at Home**

Dear Parents and Guardians

Thank you for being an essential partner in your child's learning journey. Here are a few tips to make the most of this Home Assignment:

### **Academics and Term I Preparation**

- Encourage a daily routine that includes time for reading, writing and activity-based learning.
- Focus on basic and conceptual skills.
- Revise the concepts covered in class as shared through circulars and communication.
- Prepare gradually for the Term I Exam in September — avoid last-minute stress.
- Create a study corner that's well-lit, quiet, and cheerful.

### **Play & Creative Time**

- Ensure your child gets ample free play, which boosts brain development.
- Engage in art and craft using eco-friendly materials.
- Storytelling, singing rhymes and dancing together create joyful bonds.

### **Seva & Social Responsibility**

- Introduce the child to values of compassion and sharing:
- Visit an old age home or Blind Ashram occasionally. Let the child offer fruits, biscuits or a handmade card.
- Encourage small acts of kindness like donating old toys/clothes.
- Explain the importance of Seva (selfless service) through simple examples.

### **Family Time & Social Visits**

- Plan weekend visits to relatives or grandparents to strengthen family ties.
- Share stories from your own childhood — this builds emotional connection and moral learning.

### **Stay Connected with Teachers**

- Don't hesitate to reach out for academic support or even emotional guidance.
- Teachers are here to help — schedule a brief chat during PTMs or via school communication channels.

### **Final Tips**

- Assignments are meant to be child-led. Offer guidance but let the child explore.
- All submissions will be graded and the Best Assignment of the Year will be rewarded.
- Keep things light — learning should be joyful, not stressful

**Let's raise not just a student, but a good human being — one kind act, one thoughtful task at a time.**

## **SUBJECT: ENGLISH**

**Part - A:** *-Instructions: Please complete the following tasks in your respective textbooks (Burlington) only. There is no need to redo the work on separate sheets.*

- **Writing:** Complete pages 35 and 51 in the English Reader book.
- **Grammar:** Complete pages 131 to 134 in the English Grammar book.

**Part - B:** *-Instructions: Please complete this work on separate three lines: loose sheets.*

- To improve their writing skills students are required to complete 15 pages of handwriting  practice.

**Part - C:** *-Instructions: Complete your work neatly and creatively on an A4 sheet or chart paper. Use colors, drawings, or cut-outs as needed. Label clearly and write in your best handwriting.*

- **English Grammar Art Integrated Project**

SN	Project Topic	Roll No.	Description
1	Grammar Garden (Parts of Speech)	1-6	Draw a garden and label nouns, verbs, and adjectives using color codes.
2	My Action Poster (Verbs Focus)	7-12	Draw or paste pictures of actions and label them with correct verbs.
3	Adjective Rainbow	13 -18	Draw a rainbow, write one adjective per color, and match it with a picture.
4	Noun Town	19-24	Create a town scene and label at least 10 nouns in the picture.
5	Preposition Picture Map	25-31	Draw a scene and write sentences using prepositions to describe object positions.

1. आपने अपना पिछला जन्मदिन कब और कैसे मनाया? कुछ फोटो चिपका कर इसका वर्णन करें।
2. त्यौहार हमारे जीवन में खुशियाँ लाते हैं। आपको कौन सा त्यौहार अधिक पसंद है। 8-10 पंक्तियों में इसका वर्णन करें।
3. अपने पर्यावरण की रक्षा में सहयोग देते हुए 'वृक्ष लगाओ' या 'जल बचाओ' विषय पर दो स्लोगन/नारे लिखो। A-4 sheet या Coloured paper, Pen का प्रयोग करें।
4. इस बार गमी की छुट्टियों में आपने अपने मन बहलाने के लिए क्या-क्या किया? चित्रों को देखकर लिखिए -





निम्नलिखित गद्यांशों को ध्यानपूर्वक पढ़िए और दिए गए प्रश्नों के उत्तर दीजिए-

1. श्यामा एक दिन अपने खेत में हल चला रहा था कि तभी उसका हल किसी कठोर चीज से टकराया। उसने वहाँ से मिट्टी खोदकर देखा तो उसे सोने का एक कलश नज़र आया। वह चकित रह गया। फिर धीरे से उसने कलश बाहर निकाला। कलश सोने की गिनियों व हीरों से भरा हुआ था तथा उसमें हीरे की एक अंगूठी भी थी। श्यामा कलश को लेकर दुविधा में पड़ गया और सोचने लगा कि वह इसका क्या करे। बहुत सोचने के बाद वह कलश को राजा के दरबार में ले गया। दरबार में उसने राजा के सम्मुख कलश रखते हुए सारी कथा सुनाई। राजा किसान की ईमानदारी देखकर हैरान रह गया। उसने किसान की प्रशंसा की और इनाम में सोने के सिक्के दिए।

(क) श्यामा कौन था?

(ख) श्यामा को मिट्टी खोदने पर क्या मिला?


(ग) कलश मिलने पर श्यामा को कैसा लगा?

(घ) श्यामा कलश को कहाँ ले गया?

(ङ) कलश देखकर राजा ने क्या किया?

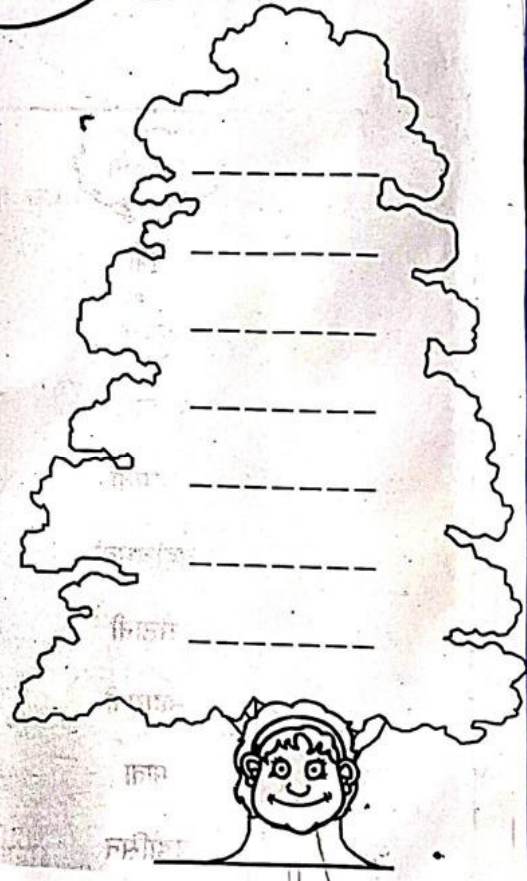
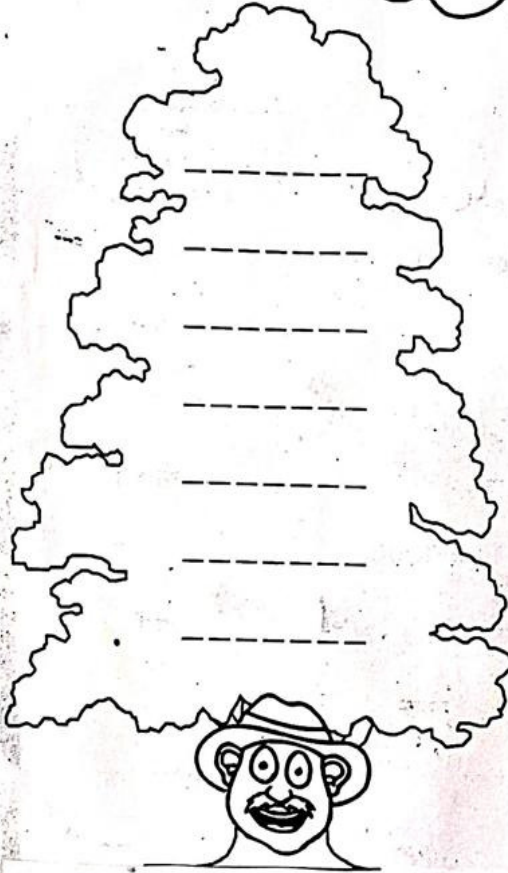
च- वाक्य बनाओ - मिट्टी, कलश, ईमानदारी, खेत

5. वृक्ष हमारे सच्चे मित्र हैं। इनसे हमें क्या-क्या मिलता है? इसके बारे में बताते हुए नीचे दिए गए वृक्ष में इनसे प्राप्त होने वाले लाभ और वस्तुओं के बारे में लिखें जैसे फल





प्रश्न क. नीचे लिखे शब्दों में से पुल्लिंग और स्त्रीलिंग अलग-अलग करके लिखो:



निम्नलिखित शब्दों के बहुवचन लिखो-

क. लड़की -

ग. नदी -

ख. बच्चा -

घ. तारा -

निम्नलिखित शब्दों के विलोम लिखो-

क. सुख ×

ग. हँसना ×


ख. ऊपर ×

घ. आगे ×



इंद्रधनुष का चित्र बनाकर उसमें रंग भरो तथा उन रंगों के नाम क्रमबद्ध तरीके से भरें।

इंद्रधनुष में रंग भरो-




खाली स्थान में 'का', 'की' और 'के' लिखकर वाक्य पूरे करो-

क. घोड़ा पेड़ ..... नीचे खड़ा हो जाता है।

ख. भैंस ..... दूध मीठा होता है।

ग. घोड़ा सवारी ..... काम आता है।

घ. आदमी घोड़े ..... पीठ पर बैठ गया।



समान अर्थ वाले शब्द लिखो-

क. बादल - .....

ख. वर्षा - .....

ग. सूरज - .....

घ. ज़मीन - .....





## आओ अभ्यास करें

### 1. चित्रों के नाम लिखकर वाक्य पूरे कीजिए।

(क) आसमान में ..... चमक रहा है।

(ख) ..... सवारी के काम आता है।

(ग) ..... को जंगल का राजा कहते हैं।

(घ) यह ..... उधर रख दो।

(ङ) ..... मिट्टी के बरतन बनाता है।

(च) बिल्ली को देखते ही ..... बिल में घुस गया।



### 2. नाम लिखिए।

(क) अपना नाम .....

(ख) अपनी माँ का नाम .....

(ग) पिताजी का नाम .....

(घ) भाई या बहन का नाम .....

(ङ) स्कूल का नाम .....

(च) दोस्त या सहेली का नाम .....

(छ) कक्षा अध्यापिका का नाम .....

(ज) मनपसंद खाने की चीज़ का नाम .....

निम्नलिखित वर्णों से दो-दो शब्द बनाओ-

ज

- .....

ज

- .....

निम्नलिखित वर्णों से नए शब्द बनाओ-

रु

- .....

रु


- .....

**SUBJECT : PUNJABI**


1ਕਵਿਤਾ ਮੇਰਾ ਸਾਈਕਲ ਦਾ ਉਚਾਰਨ ਕਰਦੇ ਹੋਏ ਵੀਡੀਓ ਬਣਾ ਕੇ ਭੇਜੇ।

2 ਆਪਣੇ ਪੰਜਾਬੀ ਸੱਭਿਆਚਾਰ ਨਾਲ ਸੰਬੰਧਿਤਚਿੱਤਰ ਚਿਪਕਾਓ (ਜਿਵੇਂ ਮੇਲੇ, ਰਹਿਣ- ਸਹਿਣ, ਤਿਉਹਾਰ,ਖਾਣ ਪੀਣ ਆਦਿ )

3) ਮੁਕਤਾ,ਕੰਨਾ,ਸਿਹਾਰੀ, ਬਿਹਾਰੀ ਮਾਤਰਾ ਨਾਲ ਸੰਬੰਧਿਤ ਕੋਈ ਪੰਜ ਚਿੱਤਰ ਚਪਕਾਓ ਅਤੇ ਉਹਨਾਂ ਦੇ ਨਾਂ ਵੀ ਲਿਖੋ



#### 4 ਹੇਠ ਦਿੱਤਾ ਅਭਿਆਸ ਕਰੋ





## ਕੰਨਾ ਸ਼ਬਦ - ਚਿੱਤਰ ਦੇਖ ਕੇ ਲਿਖੋ





































## ਬਿਹਾਰੀ (ੀ) ਸ਼ਬਦ



ਜ + ੀ + ਪ

=



ਘ + ੜ + ੀ

=



ਨ + ਦ + ੀ

=



ਸ + ੀ + ਟ + ੀ

=



ਕ + ੀ + ੜ + ੀ

=



ਸ + ਰ + ੀ + ਰ

=



ਮ + ਸ + ੀ + ਨ

=



ਕ + ਮ + ੀ + ਜ

=

## Maths

1. Do the following as given below:

Match the following :

<u>Column A</u>	<u>Column B</u>
(a) Seven thousand eight hundred	(i) 6900
(b) Six thousand nine hundred	(ii) 4015
(c) Eight thousand two	(iii) 7800
(d) Four thousand fifteen	(iv) 9009
(e) Nine thousand nine	(v) 8002

Write the next four numbers by observing the pattern carefully :

(a) 2389, 2390, 2391, ..... , ..... , ..... , .....

(b) 2211, 2212, 2213, ..... , ..... , ..... , .....

(c) 4405, 4410, 4415, ..... , ..... , ..... , .....

(d) 1178, 1278, 1378, ..... , ..... , ..... , .....



2. Look at the picture and answer the following questions.

**WORKSHEET** Skills assessed: Analysing • Drawing • Thinking • Applying

Ranjan visited a shop to buy a shirt. He saw different shirts. The shopkeeper showed him prices of a few shirts.

Shirt Color	Price (₹)
White	1496
Light Blue	999
Dark Blue	1196
Light Blue	1565
Dark Blue	985
Light Brown	6601

Can you find out the following?

From the above picture answer the following:

1. What is the price of most expensive shirt?
2. What is the price of cheapest shirt?
3. Subtract the price of most expensive shirt and cheapest shirt
4. Write expanded for every price of shirt.
5. Estimate the price of cheapest shirt nearest to tens place , hundred place and thousand place.

3. Answer the following:

Fill in the blanks using Roman numerals.

1. I celebrate my birthday on ..... of ..... (month).
2. I am ..... years old.
3. I study in class .....
4. My class has ..... students.

4. Write and learn tables from 2 to 20 .

5.

C. Complete the table.

Number	Successor	Predecessor
2568		
9010		
7461		
8000		
6500		

6.

Do the following as instructed:

**Circle all odd numbers and cross all even numbers.**

101	102	103	104	105
106	107	108	109	110
111	112	113	114	115
116	117	118	119	120

7.

Estimate the sum of the following nearest to tens and find actual sum also.

a.  $78 + 43$

b.  $314 + 211$

c.  $156 + 342$

8. Estimate the sum of the following nearest to hundreds and find actual sum also.

a.  $1347 + 1547$



b.  $651 + 143$

c.  $1237 + 2341$

9. Do the following worksheet:

$\begin{array}{r} 2,523 \\ - 1,992 \\ \hline \end{array}$	$\begin{array}{r} 3,398 \\ - 2,462 \\ \hline \end{array}$	$\begin{array}{r} 9,403 \\ - 4,327 \\ \hline \end{array}$	$\begin{array}{r} 3,709 \\ - 1,230 \\ \hline \end{array}$
$\begin{array}{r} 2,782 \\ - 1,450 \\ \hline \end{array}$	$\begin{array}{r} 3,340 \\ - 2,236 \\ \hline \end{array}$	$\begin{array}{r} 3,217 \\ - 2,223 \\ \hline \end{array}$	$\begin{array}{r} 3,145 \\ - 1,105 \\ \hline \end{array}$
$\begin{array}{r} 5,638 \\ - 3,214 \\ \hline \end{array}$	$\begin{array}{r} 8,051 \\ - 7,188 \\ \hline \end{array}$	$\begin{array}{r} 9,844 \\ - 3,924 \\ \hline \end{array}$	$\begin{array}{r} 5,694 \\ - 2,822 \\ \hline \end{array}$

## SUBJECT-SCIENCE

**Part A-**Complete your work on scrap book neatly and creatively Use colors, drawings, or cut-outs as needed. Label clearly and write in your best handwriting.

### **1. My Mini Garden**

Ask students to plant a seed (like a bean) in a pot. Observe and record its growth daily/weekly with drawings or photos. Write 5–6 lines about what plants need to grow.

### **2. My Body Booklet**

Create a small booklet with pages on different body parts (eyes, nose, skin, etc.). Write one sentence and paste/draw a picture for each.

### **3. Weather Watch Diary**

Record the weather for 7 days (sunny, rainy, cloudy). Use pictures/symbols and simple sentences.

Days	Sun rise time	Sun set time	Minimum Temperature	Maximum Temperature	Weather
Monday					
Tuesday					
Wednesday					
Thursday					
Friday					
Saturday					
Sunday					

## **Part B :**

**Answer the following questions on loose sheets:-**

- **Multiple choice questions: -**

1. Which one of the following plants has a tap root?

- a) Mustard.                                      b) Wheat                                      c)rice

2. A child may get injured in the playground because of playing ..... games

- a) rough                                      b)correct                                      c) old

3. The process of growing of a new plant from a seed is called

- a)generation                                      b)germination                                      c)photosynthesis

4.Which one of the following parts of plants absorbs water and minerals from the soil?

- a)flowers.                                      b) roots                                      c) stems

5 Que. We should repair faulty electric wires immediately because

- a)they make cut our skin  
b)they may hurt us  
c)they may give us an electric shock

6. We eat the leaves of

- a) ginger and garlic      b) Guava and broccoli      c) cabbage and coriander

7. Loud sound is

- a) bad for our health      b) good for our health      c) safe for us

8. The main source of light on the earth is

- a) The moon      b) the sun      c) Tube light

9. Which one of the following objects is non-luminous in nature?

- a) Candle      b) sun      c) earth

10. Outdoor shadow are... .. in the morning and evenings.

- a) Shorter      b) wider      c) longer

• **Fill in the blanks:-**

1. Climbers have ..... stems.
2. We must cross the road only at the .....
3. The carrot plant has ..... root.
4. Papaya has ..... seeds.
5. When we get a small wound first wash it with .....
6. We must not ..... anybody even in the fun.
7. We see non-luminous objects when light..... them.
8. The size of a shadow changes due to change in the ... .. of the sun.
9. A book is a... .. object.
10. We should not run on the .....

• **True or False :-**

1. Leaves are called food factories of plants.
2. we should not play on the road.
3. Climbers have thick stems.
4. We should get in and out of the moving bus.
5. Grass has fibrous roots.
6. It is not dangerous to play with fire.
7. Bulb is non-luminous object.
8. In the morning, the shadow is long.
9. Chirping of birds is a pleasant sound.
10. Too much noise is good for our health.

• **Odd one out:-**

- |              |         |             |            |
|--------------|---------|-------------|------------|
| 1. Bandage.  | Cotton. | Oil.        | Antiseptic |
| 2. Spinach.  | Peas.   | Rice.       | Wheat      |
| 3. .Bandage. | Lotion. | Antiseptic. | Water      |
| 4. .Papaya.  | Peas.   | Rice.       | Wheat      |
| 5. Bulb      | chair   | sun         | candle     |

•

•



• Recognize the picture:-

1



---

2



---

3



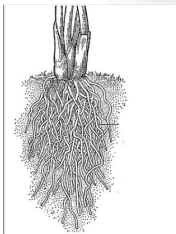
---

4




---

5



---

6



---

7



---

8



---

9



---




---

- Solve this word problem:-

## Plants

E	N	H	P	H	V	M	S	S	H	R	P	S	I
I	O	H	O	P	H	I	R	E	L	L	U	I	O
N	I	E	L	O	H	F	P	V	N	D	E	S	P
E	T	O	L	P	O	L	S	A	P	T	R	E	D
E	C	O	E	M	N	O	G	E	X	O	N	H	S
E	U	T	N	E	E	W	S	L	S	I	E	T	D
R	D	V	O	T	G	E	T	P	N	E	O	N	I
S	O	P	O	S	Y	R	O	S	O	S	I	Y	I
O	R	O	P	R	X	O	O	S	O	E	P	S	R
H	P	R	L	S	O	Y	R	W	N	E	R	O	L
E	E	O	T	A	H	D	T	L	U	D	G	T	I
E	R	Y	R	S	N	O	L	I	L	S	N	O	O
T	O	O	S	T	U	E	O	I	T	L	P	H	S
L	N	E	A	E	S	S	P	O	S	G	S	P	E

ROOTS  
 POLLEN  
 LEAVES  
 PHOTOSYNTHESIS  
 FLOWER  
 STEM  
 SEEDS  
 SOIL  
 OXYGEN  
 REPRODUCTION